

Abstract Reasoning – Test 4

25 Questions

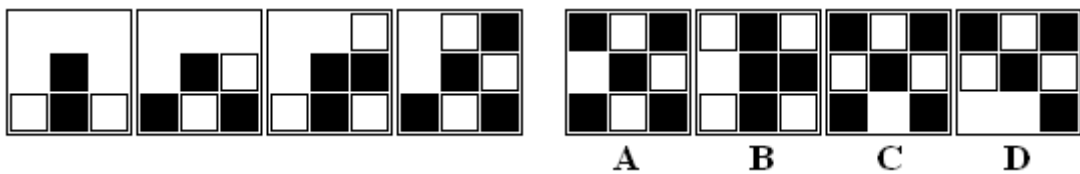
Answer as many questions as you can in 20 minutes. Circle the letter on the right which corresponds to the correct answer.

1) Which figure completes the series?



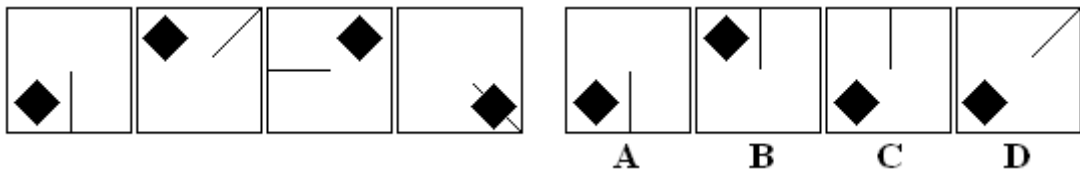
A B C D

2) Which figure completes the series?



A B C D

3) Which figure completes the series?



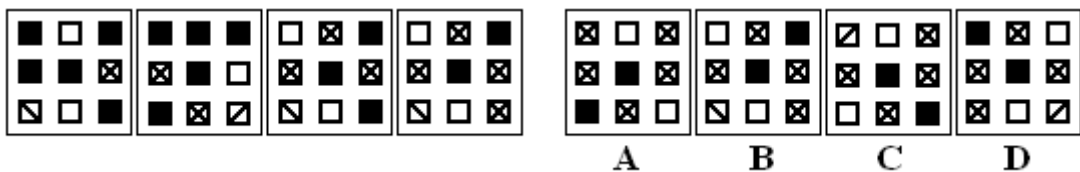
A B C D

4) Which figure completes the series?



A B C D

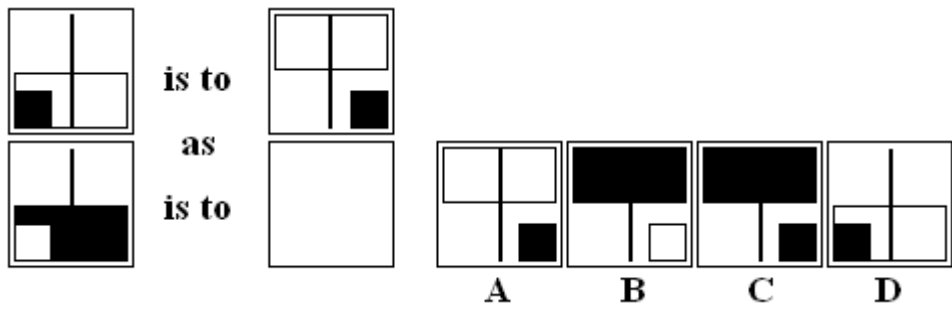
5) Which figure completes the series?



A B C D

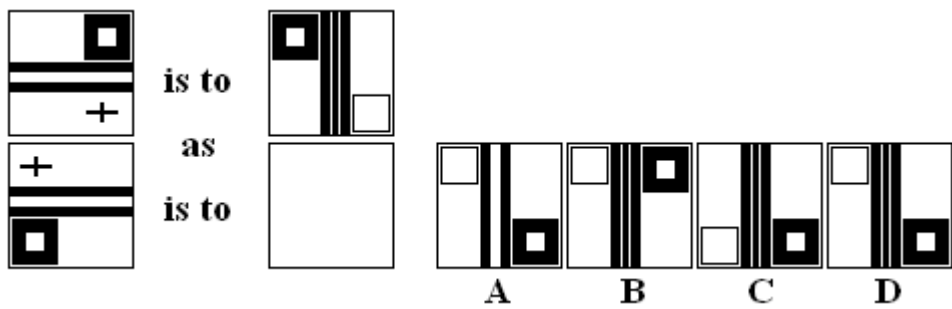
Abstract Reasoning – Test 4

6) Which figure completes the statement?



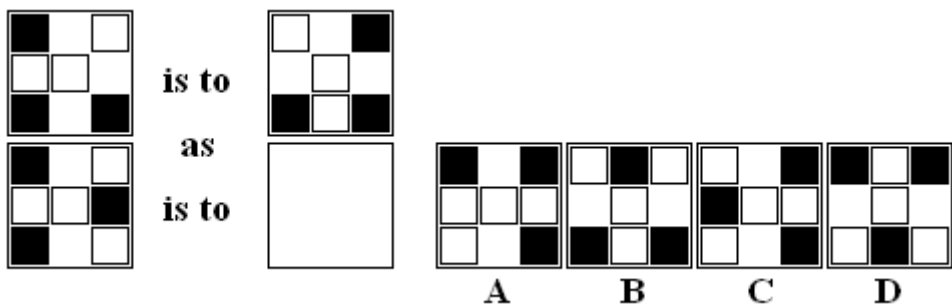
A B C D

7) Which figure completes the statement?



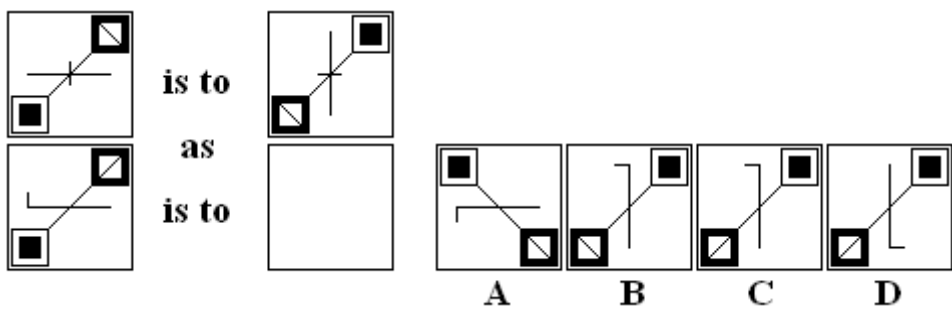
A B C D

8) Which figure completes the statement?



A B C D

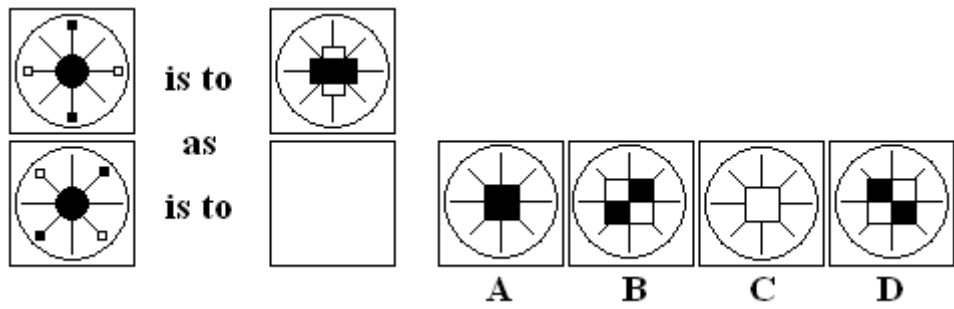
9) Which figure completes the statement?



A B C D

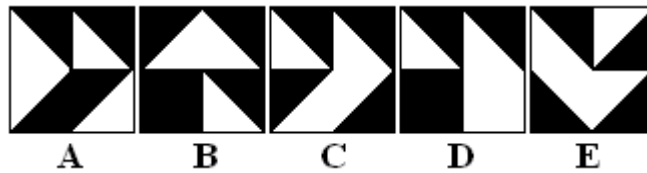
Abstract Reasoning – Test 4

10) Which figure completes the statement?



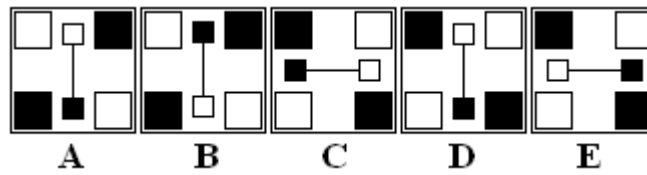
A B C D

11) Which figure is the odd one out?



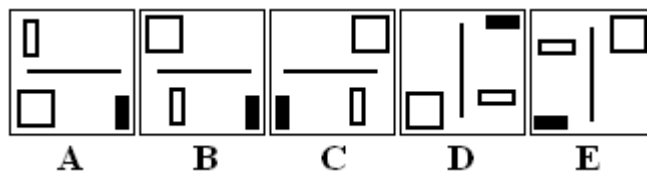
A B C D E

12) Which figure is the odd one out?



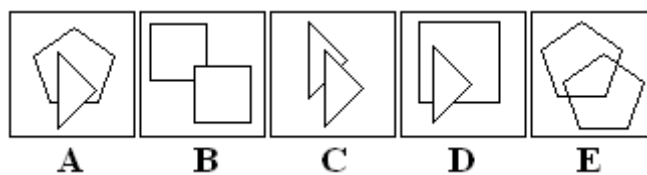
A B C D E

13) Which figure is the odd one out?



A B C D E

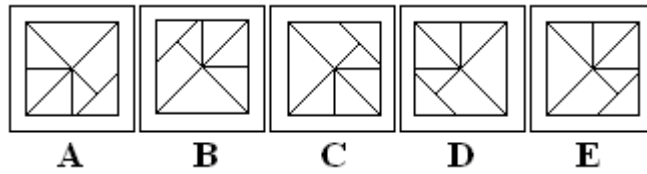
14) Which figure is the odd one out?



A B C D E

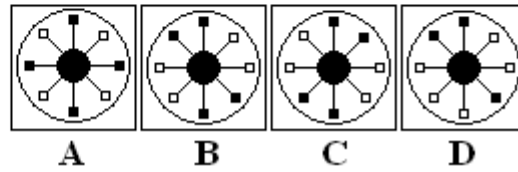
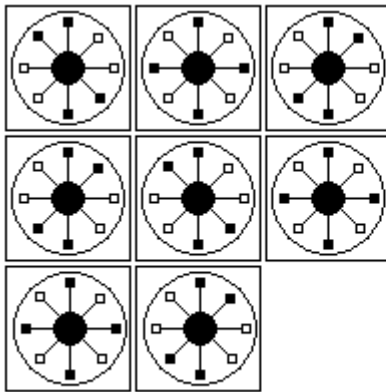
Abstract Reasoning – Test 4

15) Which figure is the odd one out?



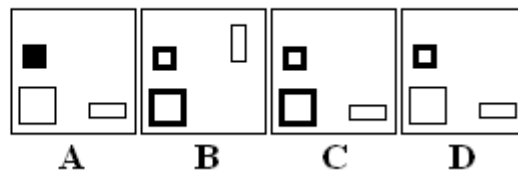

A B C D E

16) Which figure completes the series?



A B C D

17) Which figure completes the series?



A B C D

Abstract Reasoning – Test 4

18) Which figure belongs in neither group?

Group 1 **Group 2**

A B C D

A B C D

19) Which figure belongs in neither group?

Group 1 **Group 2**

A B C D

A B C D

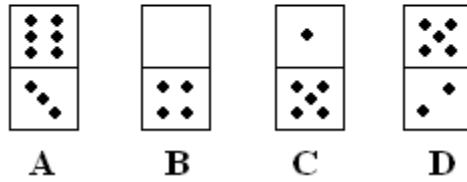
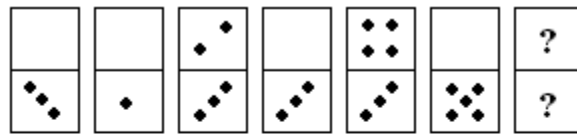
20) Which figure is next in the series?

A B C D

A B C D

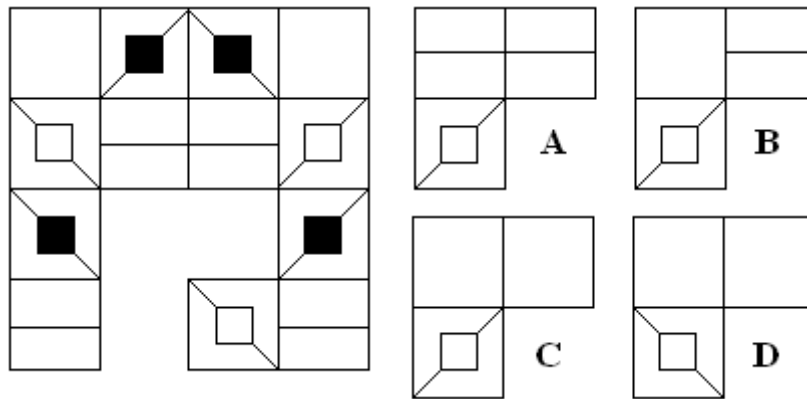
Abstract Reasoning – Test 4

21) Which figure is next in the series?




A B C D

22) Which figure completes the grid?



A B C D

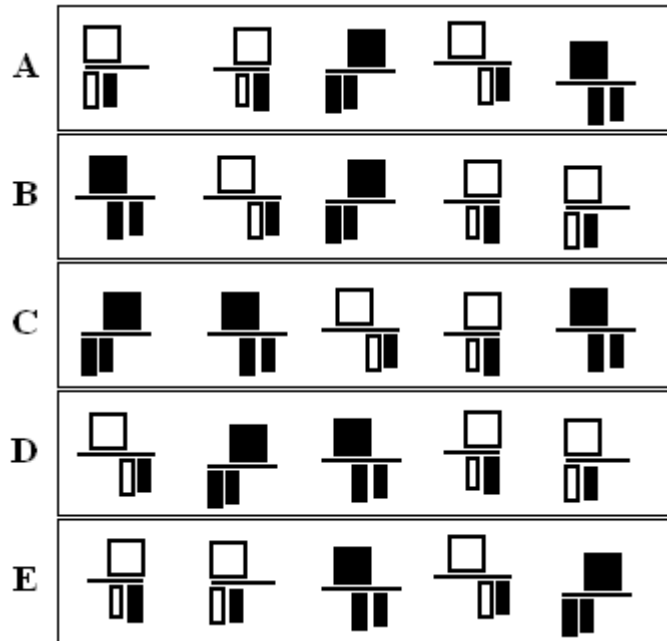
23) Which figure completes the grid?



A B C D

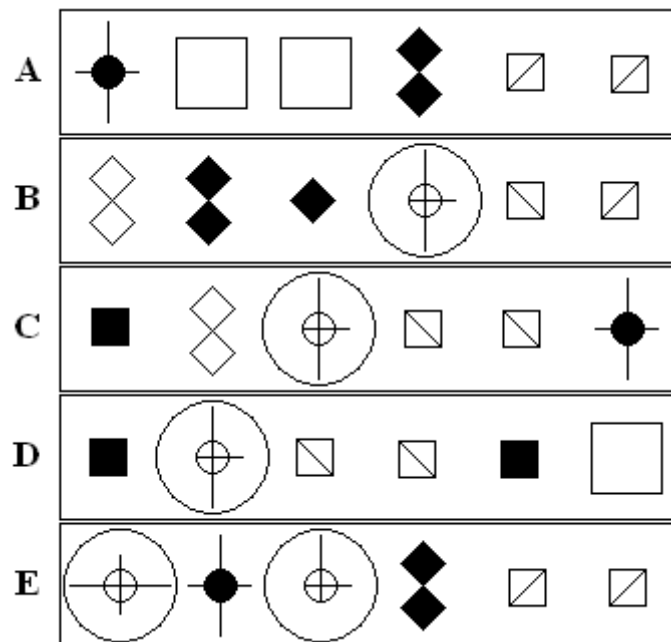
Abstract Reasoning – Test 4

24) Which figure is the odd one out?



A B C D E

25) Which figure is the odd one out?



A B C D E

End of Abstract Reasoning - Test 4

Abstract Reasoning – Test 4

Answers

- 1) **D**
- 2) **B**
- 3) **C**
- 4) **C**
- 5) **A**
- 6) **B**
- 7) **D**
- 8) **B**
- 9) **C**
- 10) **D**

- 11) **B**
- 12) **D**
- 13) **A**
- 14) **D**
- 15) **E**
- 16) **B**
- 17) **C**
- 18) **B**
- 19) **D**
- 20) **D**

- 21) **A**
- 22) **C**
- 23) **B**
- 24) **C**
- 25) **B**